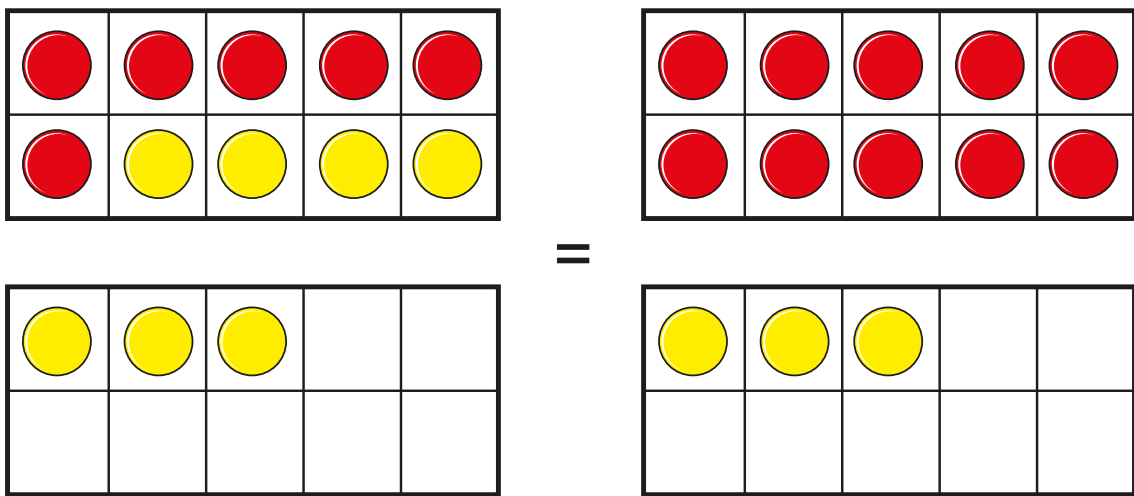
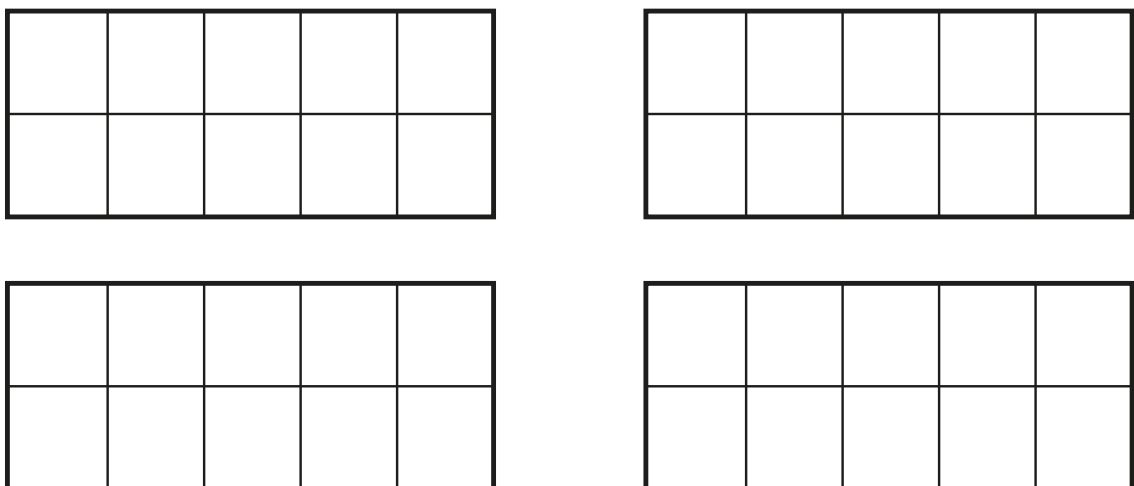


# Add by making 10

**I** The ten frames show that  $6 + 7$  is the same as  $10 + 3$



Draw counters to show that  $5 + 6$  is the same as  $10 + 1$





**2** Complete the additions.

Use ten frames to help you.

a)  $8 + 3 = 10 +$

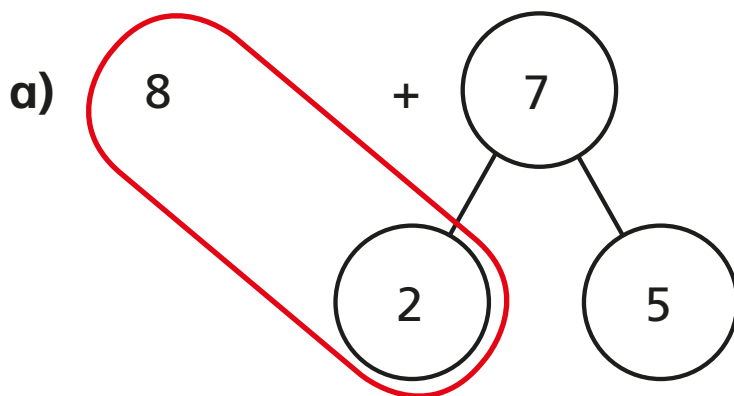
b)  $9 + 7 = 10 +$

c)  $7 + 5 = 10 +$

d)  $6 + 8 = 10 +$

**3** Use number bonds to complete the additions.

The first one has been done for you.



**10 + 5 = 15**

b)

5 + 8

5 3

10 + 3 =

c)

6 + 9

[ ] [ ]

+  =