

Comparing numbers (2)



1 Which is the smallest number in each pair?

Tick your answer.

a)

Tens	Ones
4	6

Tens	Ones
5	1

b)

Tens	Ones
7	2

Tens	Ones
7	1

How did you know which number to tick?

2 Circle the greater number in each pair.

a)

37	81
----	----

b)

90	9
----	---

c)

16	72
----	----

3 Write $<$, $>$ or $=$ to compare the numbers.

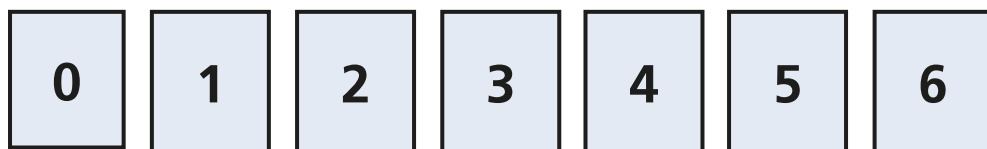
a) 19 41

b) 51 24

c) 79 80

d) 100 93

4 Use the digit cards.



Make a number greater than 25

Make a number less than 72


Make a number greater than 59

Talk about your answers.






5 Ron, Sam and Kim have each made a number.




Ron

My number has 7 tens
and some ones.



Sam

My number has 8 tens
and some ones.



Kim

My number has 6 tens
and some ones.

a) Who has made the smallest number?

b) Who has made the greatest number?

Talk about it with a partner.

